


IB266D ENGL

ENGLISH
Roll Number

--	--	--	--	--	--	--

Name of the Candidate :

--

Signature of the Candidate :

--

Time : 2 Hours
Maximum Marks : 100
GENERAL INSTRUCTIONS FOR CANDIDATES

- You are given a Test Booklet of 16 pages as well as an OMR (Optical Mark Recognition) Answer Sheet. The Test Booklet contains 80 questions serially numbered from 1 to 80. Count the pages of the Test Booklet and be sure that they are in proper order. Ensure that the Serial No. and the Code of the Test Booklet and the OMR Answer Sheet are same. In case of mismatch/defect/discrepancy in the Test Booklet and OMR Answer Sheet, report to your Invigilator and get the Test Booklet and OMR Answer Sheet replaced.
- Answers are to be marked only in the OMR Answer Sheet as per the example given below. Candidates are required to indicate their answers at an appropriate place on the OMR Answer Sheet. Darken only one circle for each question as per instructions given on Side-1 of the OMR Answer Sheet.
- For each question, there are four probable answers, out of which only one is correct. The candidate is required to select the correct answer and darken the corresponding circle of the chosen answer. For example, if your answer for Question no. 37 is (C), darken the circle (C) as given below.

Q.No.	RESPONSE
37	(A) (B) ● (D)

- Only Blue/Black Ballpoint Pen is to be used to write on the OMR Answer Sheet. Candidates should bring their own Ballpoint Pen. Use of pencil is strictly prohibited.
- The test will be of two hours duration from 11:30 a.m. to 01:30 p.m. and will have three sections with only objective-type questions.
- Additional time of 40 minutes will be allowed for "Divyang students" (differently-abled students).
- A single Test Booklet comprising all the three sections will be given to each candidate.
- There are 80 questions in all for 100 marks as per details below. 15 minutes additional time is allowed for reading the instructions from 11:15 a.m. to 11:30 a.m.

Type of Test	Sections	Number of Questions	Marks
Mental Ability Test	Section - I	From 1 to 40 = 40 Questions	50
Arithmetic Test	Section - II	From 41 to 60 = 20 Questions	25
Language Test	Section - III	From 61 to 80 = 20 Questions	25
Total		80	100





- All questions are to be attempted. Every question carries equal marks.
- You must attempt questions of each section because you have to qualify in each Section separately.
- Section - I has ten Parts. Separate directions are given for each Part.
- Overwriting, striking, cutting, applying white/correction fluid and erasing on the OMR Answer Sheet is not allowed. Such answers will not be evaluated. Do not make any stray mark on the OMR Answer Sheet. No change in the darkened circle is allowed once marked in the OMR Answer Sheet.
- Rough work must not be done on the OMR Answer Sheet. Use Page Number 16 of the Test Booklet for rough work.
- A bell will be rung after every 30 minutes.
- No negative marking will be done.

SECTION - I

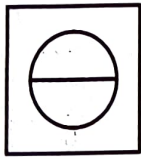



MENTAL ABILITY TEST

PART - 1


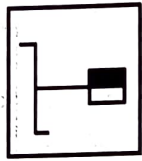

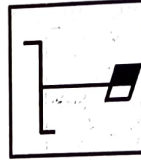
Directions : In Question Nos. 1 to 4, four figures (A), (B), (C) and (D) have been given in each question. Of these four figures, three figures are similar in some way and one figure is different. Select the figure which is different. Darken the circle for the answer in the OMR Answer Sheet against the number corresponding to the question.

1.    



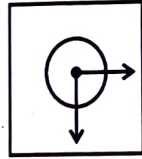
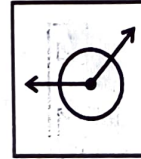
(A) (B) (C) (D)

2.    

(A) (B) (C) (D)

3.    

(A) (B) (C) (D)

4.    

(A) (B) (C) (D)

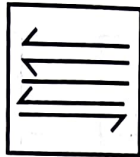
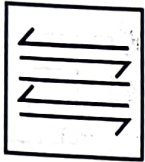
PART - 2

Directions : In Question Nos. 5 to 8, a question figure is given on the left side and four answer figures marked (A), (B), (C) and (D) are given on the right side. Select the answer figure which is exactly the same as the question figure and darken the circle in the OMR Answer Sheet against the number corresponding to the question.

Question Figure

Answer Figures

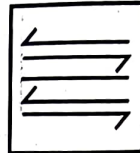
5.




(A)



(B)





(C)




(D)


6.




(A)



(B)

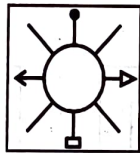
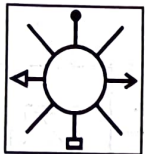


(C)

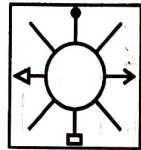


(D)

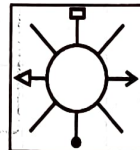
7.



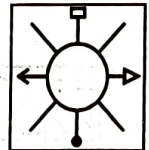
(A)



(B)

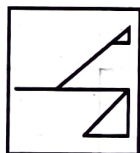
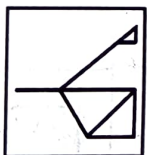


(C)

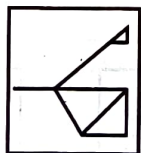


(D)

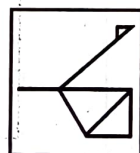
8.



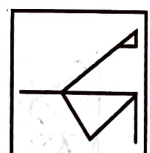
(A)



(B)



(C)



(D)

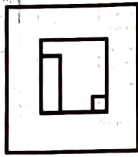
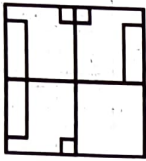
PART - 3

Directions : In Question Nos. 9 to 12, there is a question figure on the left side, a part of which is missing. Observe the answer figures (A), (B), (C) and (D) on the right side and find out the answer figure which, **without changing the direction**, fits in the missing part of the question figure in order to complete the pattern in the question figure. Indicate your answer by darkening the circle in the OMR Answer Sheet against the number corresponding to the question.

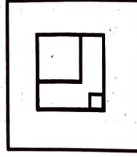
Question Figure

Answer Figures

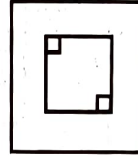
9.



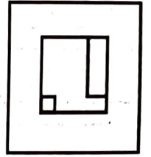
(A)



(B)

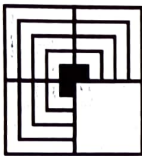


(C)



(D)

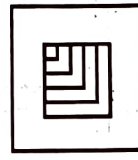
10.




(A)



(B)




(C)




(D)

11.



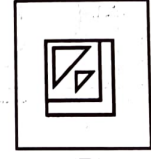
(A)



(B)

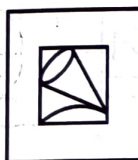



(C)

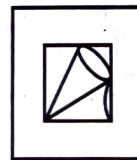


(D)

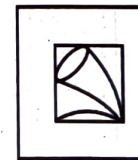
12.



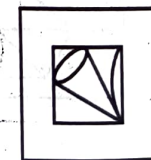
(A)



(B)



(C)



(D)



PART - 4

Directions : In Question Nos. 13 to 16, there are three question figures on the left side and the space for the fourth figure is left blank. The question figures are in a series. Find out one figure from among the answer figures given on the right side which occupies the blank space for the fourth figure on the left side and completes the series. Indicate your answer by darkening the circle in the OMR Answer Sheet against the number corresponding to the question.

Question Figures

Answer Figures

13.



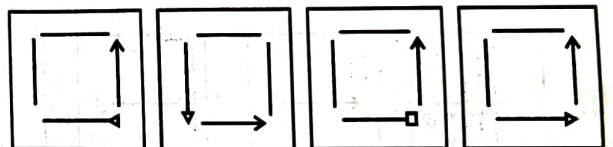
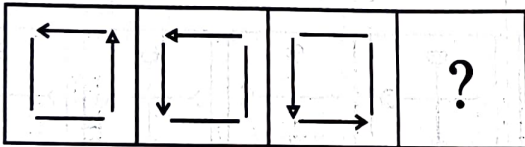
(A)

(B)

(C)

(D)

14.




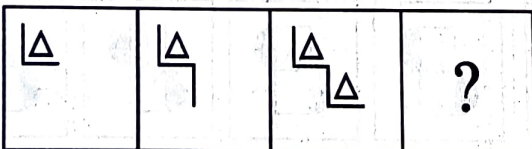
(A)

(B)

(C)

(D)

15.




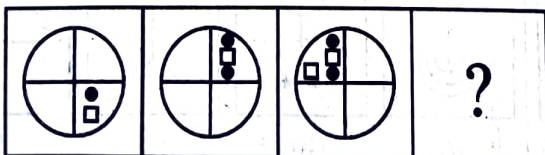
(A)

(B)

(C)

(D)

16.



(A)

(B)

(C)


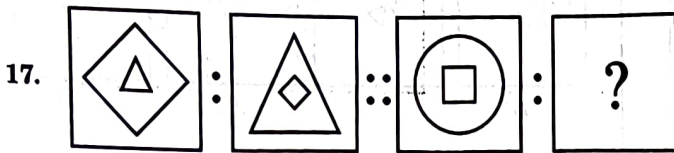
(D)

PART - 5

Directions : In Question Nos. 17 to 20, there are two sets of two question figures each. The second set has an interrogation mark (?). There exists a relationship between the first two question figures. Similar relationship should exist between the third and the fourth question figure. Select one of the answer figures which replaces the mark of interrogation. Darken the circle in the OMR Answer Sheet against the number corresponding to the question.

Question Figures

Answer Figures

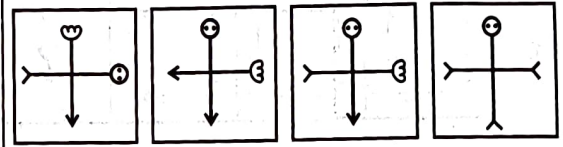
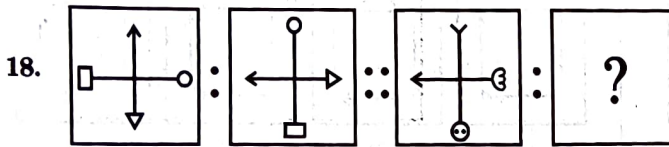


(A)

(B)

(C)

(D)

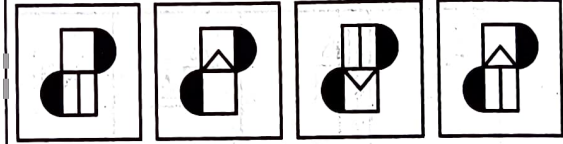
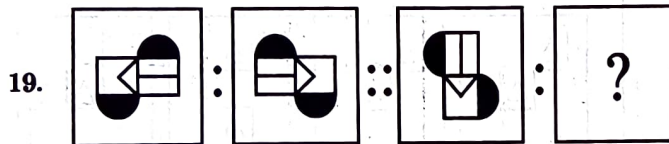


(A)

(B)

(C)

(D)

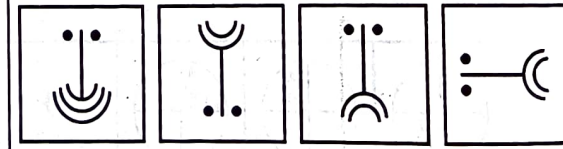
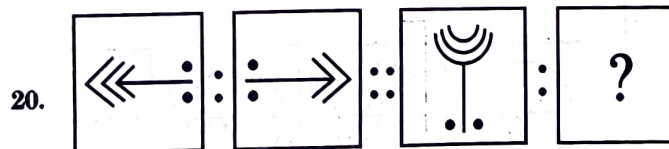


(A)

(B)

(C)

(D)



(A)

(B)

(C)

(D)

PART - 6

Directions : In Question Nos. 21 to 24, one part of a geometrical figure (Triangle, Square, Circle) is on the left side as question figure and the other one is among the four answer figures (A), (B), (C) and (D) on the right side. Find the figure on the right side that completes the geometrical figure and darken the circle in the OMR Answer Sheet against the number corresponding to the question.

Question Figure

Answer Figures

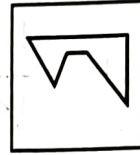
21.




(A)



(B)




(C)



(D)

22.




(A)



(B)



(C)

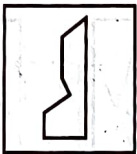


(D)

23.




(A)



(B)

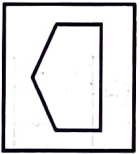


(C)

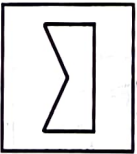


(D)

24.



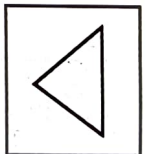
(A)



(B)



(C)



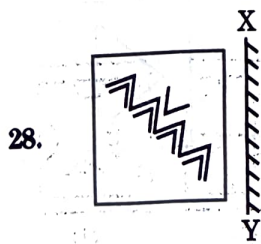
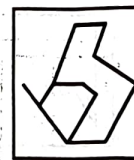
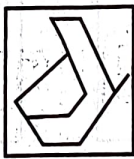
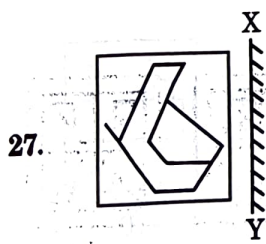
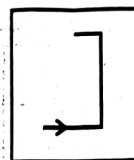
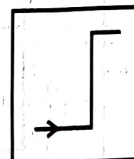
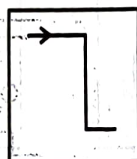
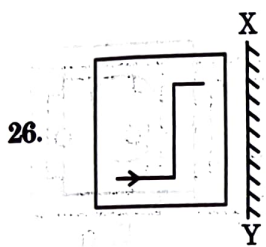
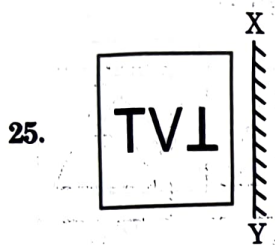
(D)

PART - 7

Directions : In Question Nos. 25 to 28, there is a question figure on the left side and four answer figures marked (A), (B), (C) and (D) are given on the right side. Select the answer figure which is exactly the mirror image of the question figure when the mirror is held at XY. Indicate your answer by darkening the circle in the OMR Answer Sheet against the number corresponding to the question.

Question Figure

Answer Figures

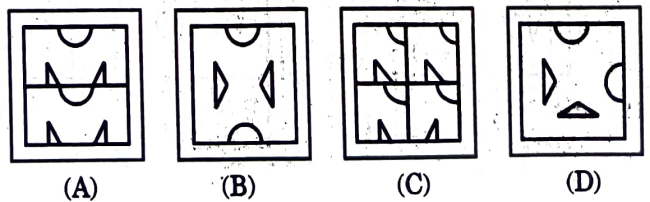
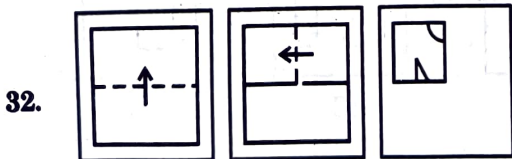
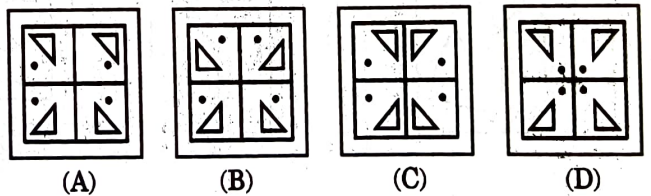
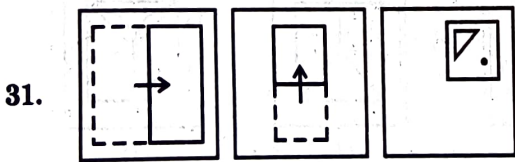
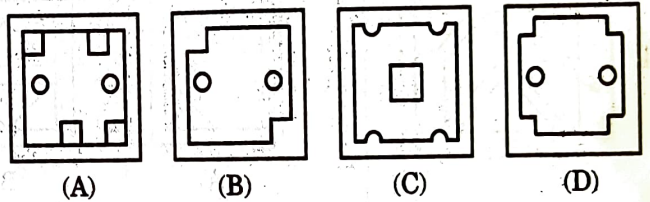
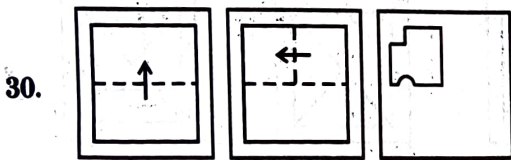
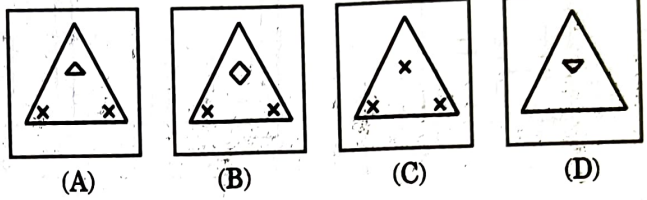



PART - 8

Directions : In Question Nos. 29 to 32, a piece of paper is folded and punched as shown in the question figures on the left side and four answer figures marked (A), (B), (C) and (D) are given on the right side. Select the answer figure which indicates how the paper will appear when opened (unfolded). Indicate your answer by darkening the circle in the OMR Answer Sheet against the number corresponding to the question.

Question Figures

Answer Figures


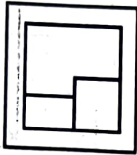
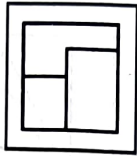



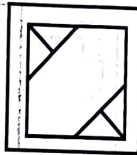
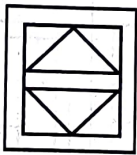



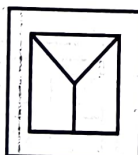
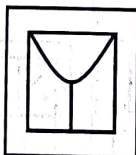
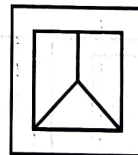
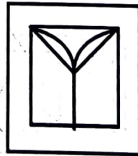

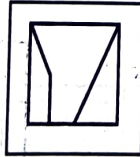
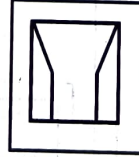
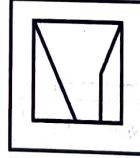
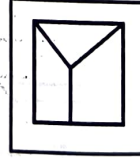


PART - 9

Directions : In Question Nos. 33 to 36, a question figure is given on the left side and four answer figures marked (A), (B), (C) and (D) are given on the right side. Select the answer figure which can be formed from the cut-out pieces given in the question figure. Darken the circle in the OMR Answer Sheet against the number corresponding to the question.

Question Figure

Answer Figures

33.		 <p>(A)</p>	 <p>(B)</p>	 <p>(C)</p>	 <p>(D)</p>
34.		 <p>(A)</p>	 <p>(B)</p>	 <p>(C)</p>	 <p>(D)</p>
35.		 <p>(A)</p>	 <p>(B)</p>	 <p>(C)</p>	 <p>(D)</p>
36.		 <p>(A)</p>	 <p>(B)</p>	 <p>(C)</p>	 <p>(D)</p>

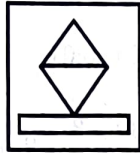

PART - 10

Directions : In Question Nos. 37 to 40, a question figure is given on the left side and four answer figures marked (A), (B), (C) and (D) are given on the right side. Select the answer figure in which the question figure is hidden/embedded. Darken the circle in the OMR Answer Sheet against the number corresponding to the question.

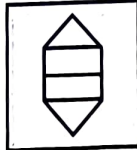
Question Figure

Answer Figures

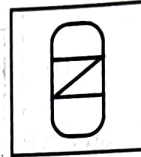
37.




(A)



(B)

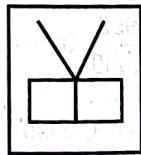


(C)

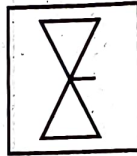


(D)

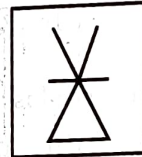
38.




(A)



(B)




(C)



(D)


39.



(A)



(B)

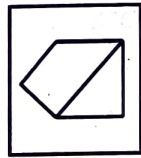



(C)

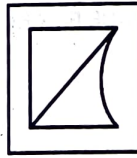


(D)

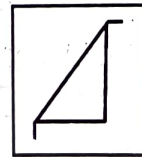
40.



(A)



(B)



(C)



(D)

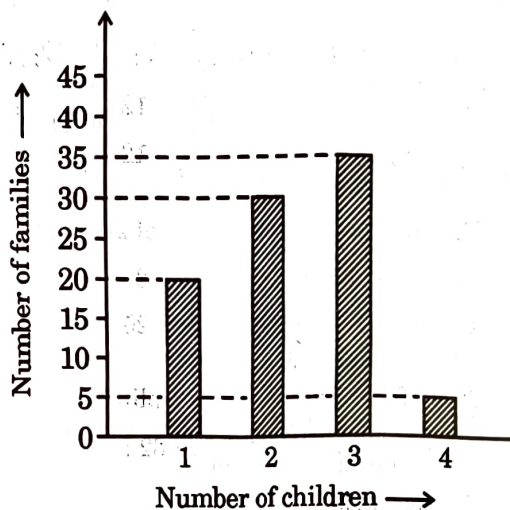
SECTION - II
ARITHMETIC TEST

Directions : For every question, four probable answers as (A), (B), (C) and (D) are given. Only one out of these is correct. Choose the correct answer and darken the circle in the OMR Answer Sheet against the number corresponding to the question.

41. How many prime numbers are there between 1 and 11 ?
 (A) 5 (B) 4
 (C) 6 (D) 3
42. The product of 999 and 9999 is :
 (A) 999999 (B) 999001
 (C) 9989001 (D) 899991
43. The product of 0.2 and 0.03 is :
 (A) 0.006 (B) 0.06
 (C) 0.6 (D) 6
44. The sum of all factors of 64 is :
 (A) 125 (B) 126
 (C) 127 (D) 128
45. The greatest common factor of 20 and 30 is :
 (A) 5 (B) 8
 (C) 10 (D) 25
46. The following, on simplification, gives
 $6.082 + 60.82 + 608.2 - 0.6082$:
 (A) 674.102
 (B) 674.4938
 (C) 675.1022
 (D) 675.5916
47. $0.1 \times 0.1 \times 0.1$ is equal to :
 (A) 0.1 (B) 0.001
 (C) 0.01 (D) 1.000
48. $\frac{3}{2} \div \frac{3}{2} \times 2 + \frac{3}{2}$ is equal to :
 (A) 2 (B) 6
 (C) $\frac{7}{2}$ (D) $\frac{2}{7}$
49. $\frac{999}{1000}$ in decimal form is :
 (A) 0.0999 (B) 9.99
 (C) 0.999 (D) 0.00999
50. 0.238 is equal to the fraction :
 (A) $\frac{119}{500}$ (B) $\frac{238}{25}$
 (C) $\frac{119}{25}$ (D) $\frac{119}{50}$
51. 100 cm^2 converted to m^2 (metre square) is :
 (A) 0.1 m^2 (B) 0.01 m^2
 (C) 1 m^2 (D) 10 m^2

SPACE FOR ROUGH WORK

52. A train left Delhi for Jaipur at 10 : 45 a.m. and reached Jaipur at 3 : 30 p.m. The time of the journey is :
- (A) 7 hours 15 minutes
(B) 4 hours 45 minutes
(C) 4 hours 30 minutes
(D) 2 hours 15 minutes
53. The missing number in the given expression $58394 - 86 - 86 = \underline{\hspace{2cm}} \times 86$ is :
- (A) 677 (B) 678
(C) 680 (D) 681
54. There were 500 eggs in a box. $\frac{3}{25}$ of them broke and $\frac{1}{5}$ of the total are to be kept for the guests. The number of eggs which can be used is :
- (A) 60 (B) 100
(C) 340 (D) 440
55. A shopkeeper bought a wall clock for ₹ 200 and sold it at a profit of ₹ 40. The selling price of the wall clock is :
- (A) ₹ 220 (B) ₹ 230
(C) ₹ 240 (D) ₹ 250
56. A fruit seller bought apples for ₹ 1,500 and spent ₹ 100 in bringing the apples to his shop. He sold these apples for a total of ₹ 2,236. How much profit did he earn ?
- (A) ₹ 630 (B) ₹ 636
(C) ₹ 640 (D) ₹ 642
57. The length of the 5th side of a pentagon, with perimeter 80 cm and the sum of lengths of whose four sides is 63 cm, is :
- (A) 12 cm (B) 13 cm
(C) 15 cm (D) 17 cm
58. A complete angle is equal to :
- (A) 1 right angle
(B) 2 right angles
(C) 3 right angles
(D) 4 right angles
59. The sum of all interior angles of a rectangle is equal to :
- (A) 360° (B) 90°
(C) 270° (D) 180°
60. In a survey of 115 families, the number of children in each family was recorded and the data has been represented by the bar graph. From the bar graph, the number of families having no child is :



- (A) 10 (B) 20
(C) 25 (D) 40

SPACE FOR ROUGH WORK

SECTION - III
LANGUAGE TEST

Directions : There are **four** passages in this Section. Each passage is followed by **five** questions. Read each passage carefully and answer the questions that follow. For each question, **four** probable answers as (A), (B), (C) and (D) are given. Only **one** out of these is **correct**. Choose the correct answer and darken the circle in the OMR Answer Sheet against the number corresponding to the question.

Passage - 1

Flowers are useful to us in many ways. Flowers come in different colours and shapes. They are a symbol of beauty. Flowers are used in religious worship. Bouquets of flowers are given to show love and appreciation. Flowers are strung as garlands and used to adorn deities and honour celebrities. Flowers are arranged in vases to add beauty to our living environment.

Flowers have practical uses too. They are used to make perfumes, tea and cosmetic products. Certain flowers are used as medicines. In short, flowers are important because they have a positive impact on the body and the mind.

61. Flowers are _____ to us in many ways.
(A) given (B) useful
(C) sold (D) harmful
62. Flowers are found in _____.
(A) different shapes
(B) many colours
(C) different colours and shapes
(D) a uniform size
63. The practical uses of flowers are :
(A) making tea, perfumes and cosmetic products
(B) arranging in vases
(C) making garlands
(D) praying and worshipping
64. _____ flowers are used to make medicines.
(A) All (B) Some
(C) Colourful (D) Small
65. The word 'impact' means :
(A) force (B) effect
(C) act (D) hit

Passage - 2

Sonam was staring at the new cycle on display at the shop. She was amazed to see the new shiny red cycle. Her father noticed it and said to her, 'Come along, we need to get going.' Sonam had a last look at the cycle and followed her father. She went to bed thinking about the shiny, red cycle. The next day she kept talking about the cycle to her friends in school. When she returned home, she noticed a new cycle parked near the gate. She screamed in joy calling out to her mother. Her parents came out smiling and told her that it was her birthday gift and gave her the cycle. Sonam was delighted and hugged her parents happily.

66. Sonam went with her _____ to a shop.
(A) uncle (B) father
(C) brother (D) friends
67. Sonam was attracted by the shiny _____ cycle in the shop.
(A) red (B) green
(C) yellow (D) black
68. Sonam's parents presented her the new red cycle :
(A) as her birthday gift.
(B) for her success in the exams.
(C) because she liked it.
(D) because she did not have a cycle.
69. Sonam showed her happiness by :
(A) hugging her parents.
(B) thanking her parents.
(C) running around the cycle.
(D) jumping with joy.
70. The word 'amazed' means the same as :
(A) remembered (B) surprised
(C) shocked (D) afraid

Passage - 3

Caged behind thick glass, the most famous dancer in the world cannot be missed in the National Museum, Delhi. The Dancing Girl of Mohenjo-daro is a rare artefact made of bronze. Our school textbooks also communicate a wealth of our 5000 years' heritage of art.

A series of bangles of shell, ivory or thin metal adorn her left upper arm down to her fingers. It is a modern art with a necklace with three pendants bunched together and a few bangles above the elbow and wrist on her right hand.

She speaks of the fearless human spirit and reminds us of the impact that a work of art leaves on our senses.

71. 'The Dancing Girl' is caged behind thick glass because _____.
- (A) it is a rare artefact
(B) she is the most famous dancer
(C) it is adorned with expensive gemstones
(D) she is fearless
72. The 'pendants' are a part of _____.
- (A) bangles
(B) necklace
(C) wristbands
(D) bands worn on elbows
73. Read statements (i) and (ii) and choose the correct option from the ones given below :
- (i) Her bangles are made of shell or thin metal.
(ii) She wears a necklace made of ivory.
- (A) (i) is true, but (ii) is false.
(B) (ii) is true, but (i) is false.
(C) Both (i) and (ii) are true.
(D) Both (i) and (ii) are false.
74. Which of the following is a **not** a synonym of 'fearless' ?
- (A) timid (B) bold
(C) valiant (D) courageous
75. The word 'artefacts' means _____.
- (A) facts about art
(B) pieces of art made by man
(C) objects dug from the earth
(D) statues made of bronze

Passage - 4

Today, giant pandas are found only in the bamboo forests of Central China and in small numbers in Tibet. Bamboo forests provide them food, shelter, as well as safety. Giant pandas spend most of their time wandering in the bamboo forests, chewing bamboo shoots. As they feed only on bamboo shoots and that too in huge quantities, there isn't always enough food for them.

Due to excessive hunting and destruction of their natural habitat, these exotic animals are nearing extinction. They can be seen only in zoos, where it is not an easy thing to take care of giant pandas, because it would be difficult to find food to feed them.

76. Why is it difficult to take care of a giant panda in a zoo ?
- (A) The zoo is a crowded place.
(B) It is difficult to take care of their young ones in a zoo.
(C) It is difficult to find enough food to feed them.
(D) Pandas are afraid of hunters.
77. What is the staple food of giant pandas ?
- (A) Bamboo trees
(B) Bamboo shoots
(C) Bamboo leaves
(D) Green leaves and grass
78. Why is this exotic animal nearing extinction ?
- (A) Most of them are kept in the zoos for entertainment.
(B) Due to excessive hunting and destruction of their natural habitat.
(C) China does not have many bamboo forests.
(D) They often die immediately after they are born.
79. Which of the following words is an antonym of the word 'giant' ?
- (A) big (B) large
(C) tiny (D) long
80. Zoo is a place where _____.
- (A) the birds are kept in cages
(B) animals eat and take rest
(C) children go to entertain animals
(D) animals and birds are kept in enclosures and cages

2788033

IB266D ENGL - E

(16)

SPACE FOR ROUGH WORK

